

MEASUREMENT CONVERSIONS

The image shows a tablet displaying a 'Measurements Conversions' app interface. The app has a title 'Measurements CONVERSIONS' and a prompt 'Choose a category below.' It lists two systems: 'Metric System' and 'Customary System'. Under 'Metric System', there are buttons for 'LENGTH', 'WEIGHT', 'CAPACITY', and 'MIXED WORD PROBLEMS'. Under 'Customary System', there are buttons for 'LENGTH', 'WEIGHT', and 'CAPACITY'. A green pencil is visible on the tablet screen.

Next to the tablet is a worksheet titled 'Measurements Task Cards'. It has a 'set:' box and directions: 'Directions: Write the answers to each task card in the correct box. If there is more than one question to answer on the card, be sure to include all answers in the box.' The worksheet contains a grid of 12 numbered boxes (1-12) for answers. A green pencil is also visible on the worksheet.

 **LNKtivity**
Interactive Learning Guides

WAIT!

Thank you for considering this LINKtivity for your classroom, but before you make a decision - you should know that you can get **access to this LINKtivity + PLUS our entire library** for about the same price as a single LINKtivity!

The results are in: **Teachers LOVE LINKtivities...** and want more! So, we've made it SUPER easy and cost effective for you to access any and ALL of our LINKtivities inside our LINKtivity Learning membership option! Instead of purchasing just ONE LINKtivity - why not get access to ALL of them... for about the SAME PRICE!



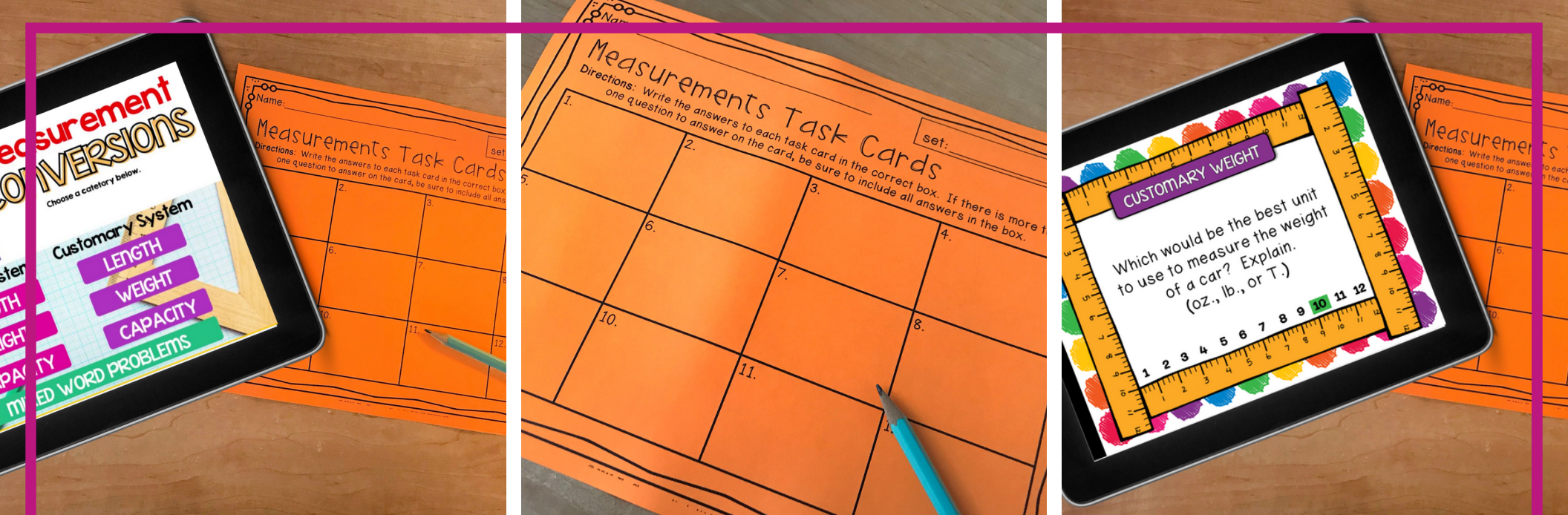
INSIDE THE MEMBERSHIP YOU'LL HAVE UNLIMITED ACCESS TO:

- ✓ The **entire growing LINKtivity® library** inside the Membership (LINKtivities for all content areas)
- ✓ ALL **future LINKtivities** to be added to the membership (new releases each month!)
- ✓ **Teacher guides** to help you set up each LINKtivity® successfully in your classroom
- ✓ **Student resources** that go along with each LINKtivity (printable OR digital)
- ✓ **Kid-friendly rubrics** and **answer keys** for each LINKtivity®

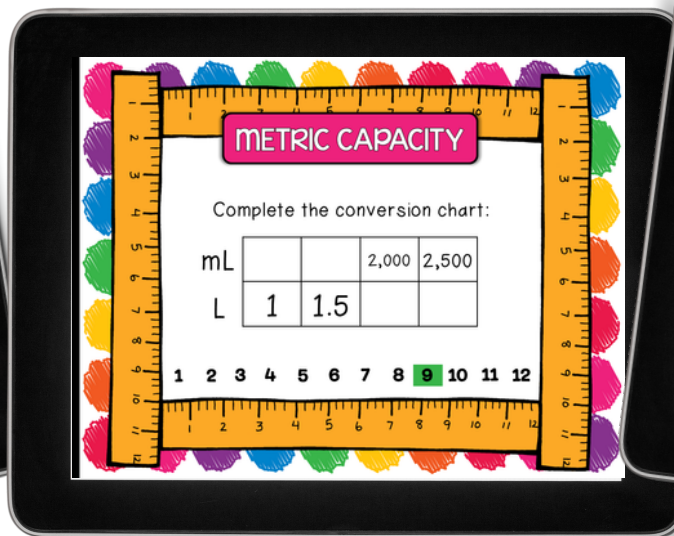
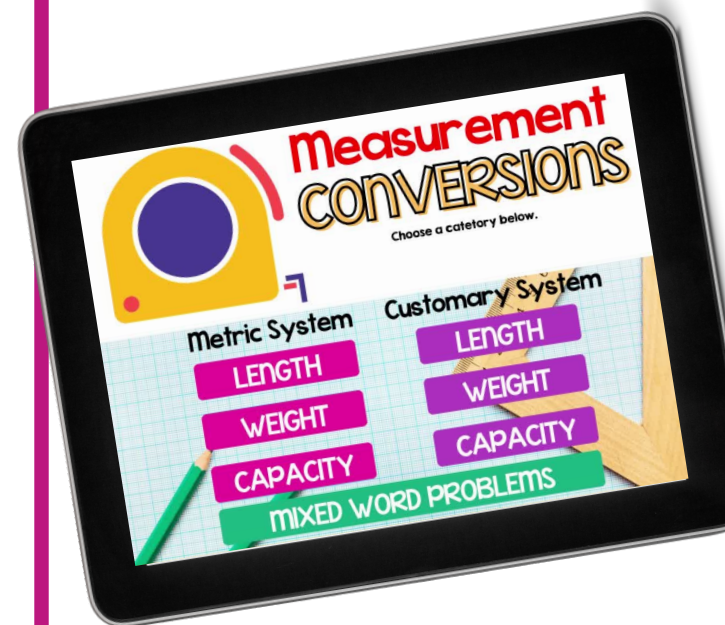


JOIN NOW





Your students are going to love this hands-on approach to learning about measurement conversions including both metric and customary length, weight, and capacity. Resource includes a LINKtivity® digital learning guide, a student recording sheet (printable or digital), answer keys, and a teacher guide.



More Sample Slides

METRIC LENGTH

Which would take longer to travel:
5,000m or 2km?

1 2 3 4 5 6 7 8 9 10 11 12

SET COMPLETE!
Click HERE to Check Your Answers

CHECK YOUR ANSWERS!

METRIC LENGTH

Measurements Task Cards

Directions: Write the answers to each task card in the correct box. If there is more than one question to answer on the card, be sure to include all answers in the box.

1. 2cm	2. 3cm	3. 100mm	4. 2km	5. 3,000m
6. 1.5cm	7. 100cm	8. 75mm	9. 8m	10. 7.5cm
11. 500m	12. 4mm	13. 35mm	14. 2,000m	15. 150cm
16. 5,000m	17. 2,000g	18. 3yd.	19. \$12	20. 2,000m

1 2 3 4 5 6 7 8 9 10 11 12

CUSTOMARY WEIGHT

Make the following conversions:

- 2lb. = ___ oz.
- 80 oz. = ___ lb.
- 4 T. = ___ lb.

1 2 3 4 5 6 7 8 9 10 11 12

CUSTOMARY WEIGHT

Balance the scales below:

2T.	500lb.	? lb
? lb.	? oz.	82 oz.

1 2 3 4 5 6 7 8 9 10 11 12

CUSTOMARY WEIGHT

Which would be the best unit to use to measure the weight of a car? Explain. (oz., lb., or T.)

1 2 3 4 5 6 7 8 9 10 11 12

CUSTOMARY LENGTH

Complete the conversion chart:

in.	24	48
ft.	1	3

1 2 3 4 5 6 7 8 9 10 11 12

MIXED WORD PROBLEMS

Sarah cut 20cm of ribbon to wrap around a gift. How many millimeters is the ribbon?

1 2 3 4 5 6 7 8 9 10 11 12

MIXED WORD PROBLEMS

A box contains 4 jars of pickles. The total weight of all 4 jars is 8 kg. What is the weight of each jar in grams?

1 2 3 4 5 6 7 8 9 10 11 12

CHECK YOUR ANSWERS!

MIXED WORD PROBLEMS

Measurements Task Cards

Directions: Write the answers to each task card in the correct box. If there is more than one question to answer on the card, be sure to include all answers in the box.


1. 3,000m	2. 25 apples	3. 200mm	4. 2,000g
5. 12 cartons	6. Many is taller by 4 inches	7. 3yd.	8. \$12
9. Yes, because 2pt. = 4c.	10. 6ft. 4in.	11. 1.5kg	12. 2,000m

1 2 3 4 5 6 7 8 9 10 11 12



This LINKtivity is provided with

AUDIO SUPPORT



CUSTOMARY WEIGHT

Sam's new puppy weighs 42oz. How many pounds does he weigh? Are there any left over ounces?

1 2 3 4 5 6 7 8 9 10 11 12

Perfect for English language learners or students who could use a little extra support!



Printable & Digital Student Recording Sheet

Printable Recording Sheet for LINKtivity

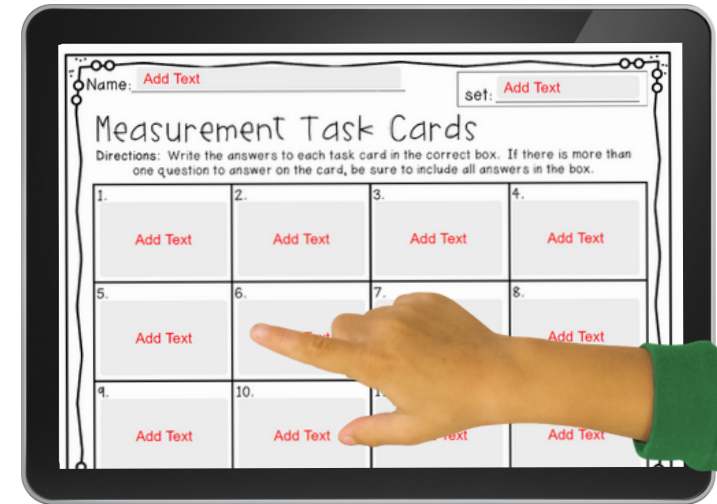
Name: _____ set: _____

Measurement Task Cards

Directions: Write the answers to each task card in the correct box. If there is more than one question to answer on the card, be sure to include all answers in the box.

1.	2.	3.	4.
5.	6.	7.	8.
9.	10.	11.	12.

© 2016. The Classroom Nook. ALL RIGHTS RESERVED.



Digital Recording Sheet for LINKtivity in Google Slides

Answer Key

MIXED WORD PROBLEMS

Name: _____ set: Word Problems

Measurements Task Cards

Directions: Write the answers to each task card in the correct box. If there is more than one question to answer on the card, be sure to include all answers in the box.

1. 3,000m	2. 25 apples	3. 200mm	4. 2,000g
5. 12 cartons	6. Mary is taller by 4 inches	7. 3yd.	8. \$12
9. Yes, because 2pt. = 4c.	10. 6ft. 4in.	11. 1.5kg	12. 2,000m

